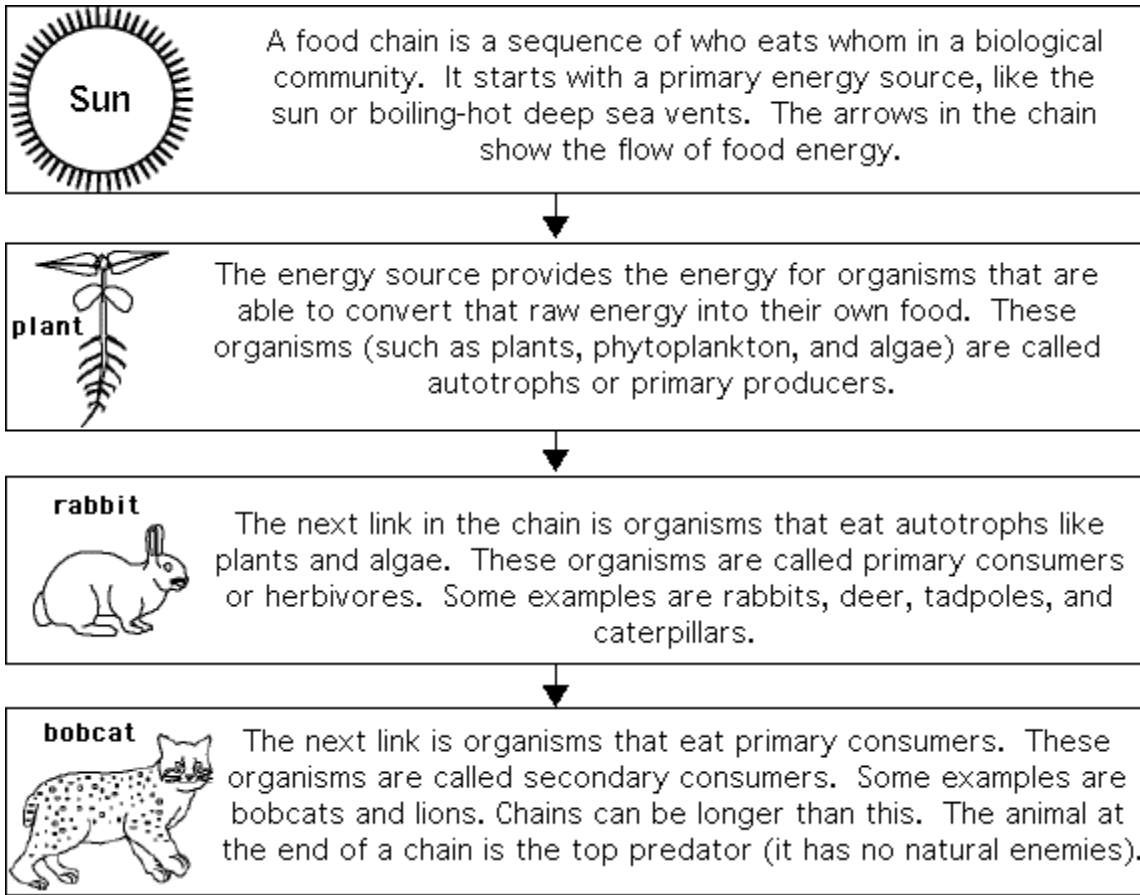


Name: _____

Date: _____ Period _____







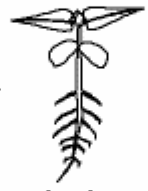





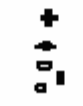



Questions

1. What do the arrows in a food chain represent? _____

2. A food chain starts with an _____ source.
3. Organisms that make their own food are called _____
or _____.
4. Organisms that eat plants are called _____
or _____.
5. An animal with no natural enemies is a _____.

Circle the missing organism in these food webs

 <p>Sun</p>	<ul style="list-style-type: none"> a. plankton b. alligator c. fish d. grass e. chicken 	 <p>zebra</p>	<ul style="list-style-type: none"> a. spider b. guppy c. lion d. wheat e. human 	
 <p>Sun</p>	 <p>algae</p>	<ul style="list-style-type: none"> a. moth b. snail c. whale d. caterpillar e. cricket 	<ul style="list-style-type: none"> a. lion b. snail c. fish d. grass e. crow 	 <p>raccoon</p>
 <p>Sun</p>	 <p>plants</p>	<ul style="list-style-type: none"> a. grasshopper b. anaconda c. falcon d. grass e. spider 	 <p>jaguar</p>	
 <p>Sun</p>	 <p>grass</p>	<ul style="list-style-type: none"> a. weasel b. spider c. seaweed d. wolverine e. cricket 	 <p>snake</p>	<ul style="list-style-type: none"> a. sheep b. goat c. ant d. owl e. moose
 <p>Sun</p>	 <p>phytoplankton</p>	<ul style="list-style-type: none"> a. zooplankton b. algae c. seal d. walrus e. moss 	<ul style="list-style-type: none"> a. jellyfish b. spider c. krill d. starfish e. clam 	 <p>humpback whale</p>